


SHAPES AND SPACE

CHAPTER-1

TOPIC-SQUARE

Q.1- Write the definition of square and draw it.

Ans- Square has four sides and four corners. Its four sides are equal.



Q.2- Give one example of square shape.

Ans- Carrom board.

Q.3- How many sides does a square have?

Ans- Square have four sides.

Q.4- Would the four sides of the square be equal?

Ans- Yes.

Q.5- What is square?


Ans- Square is a shape.

CHAPTER-1

TOPIC-RECTANGLE

Q.1- Write definition of rectangle and draw it.

Ans-



Rectangle has four sides and four corners. Its opposite sides are equal.

Q.2- Give one example of rectangle shape.

Ans. Door.

Q.3- What is rectangle?

Ans- Rectangle is a shape.

Q.4-How many sides does a rectangle have?

Ans- 4 sides

Q.5- Would the four sides of a rectangle be equal ?

Ans- No.

|

I

CHAPTER-1

TOPIC-TRIANGLE

Q.1- What is a triangle?

Ans- Triangle is a shape.

Q.2- How many sides does a triangle have?

Ans- 3 sides.

Q.3- Give one example of triangle shape.

Ans- Hill

Q.4- Write definition of triangle ?

Ans- Triangle has three sides and three corners.

Q.5- Draw a triangle shape.

Ans.-

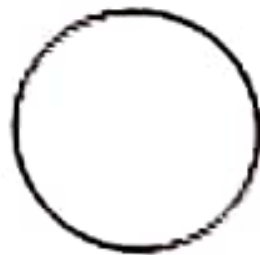


CHAPTER-1

TOPIC-CIRCLE

Q.1- Write definition of circle and draw it?

Ans-



Circle has no side and no corner.

The shape of coin is like a circle.

Q.2- Give one example of circle?

Ans- Coin.

Q.3- What is a circle?

Ans- Circle is a shape.

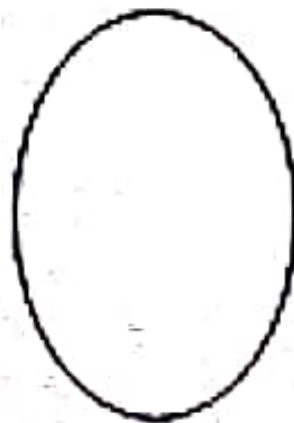
Q.4- How many sides does a circle have?

Ans- The circle has no side.

OVAL

Q.1- Write the definition of an oval and draw it?

Ans-



Oval has no side and no corner. The shape of an egg is like an oval.

Q.2- What is an oval?

Ans- An oval is a shape.


Q.3- Give one example of an oval?

Ans- Egg

Q.4- How many corners does an oval have?

Ans- An oval has no corner.

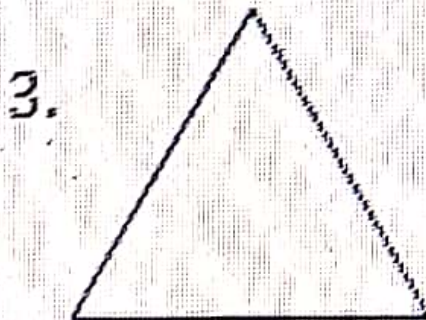
Q,4- Write the names of the shapes given below:



Circle



Rectangle




Triangle



Square

5.



Oval